


## worksheet

1. What's the greatest whole number that can be filled in the  ?


$$\square \times 8 < 50 \quad \square \times 7 < 60 \quad \square \times 5 < 26$$

2. There are 13 oranges in box . What is the largest number of people that can each take 4 oranges?



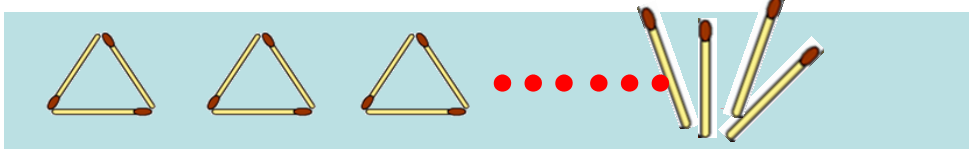
Number sentence: \_\_\_\_\_

3. There are 14 oranges in box . What is the largest number of people that can each take 4 oranges?



If there are 15 oranges , 16 oranges, 17 oranges .....?

4. Xiaoqiao has a bundle of sticks, and we're going to use these sticks to build these individual triangles



In the end, how many sticks may be left?

5. Fill in each box below with 5, 7, 41 and 6 without repetition.

$$\square \div \square = \square r \square$$