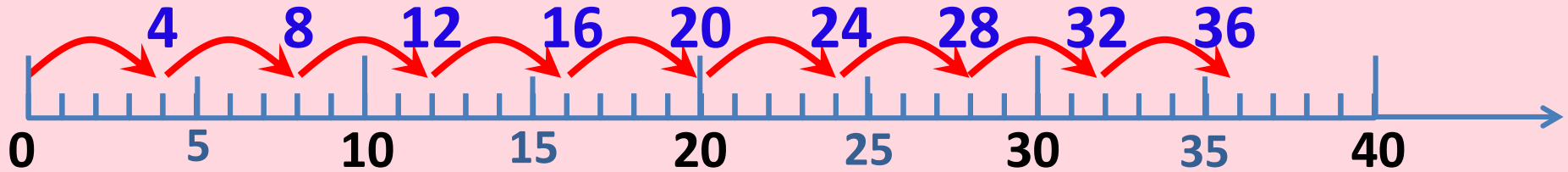


Mathematics

Teacher : Sunny



Finish the number line of 4 Times Table.



1 four 4

2 fours 8

3 fours 12

4 fours 16

5 fours 20

6 fours 24

7 fours 28

8 fours 32

9 fours 36

Quick Response

$$4 \times 5 = 20$$

$$7 \times 4 = 28$$

$$4 \times 3 = 12$$

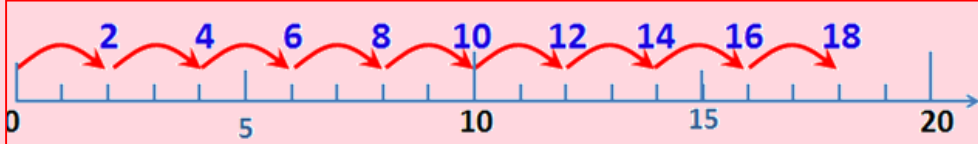
$$4 \times 4 = 16$$

$$4 \times 9 = 36$$

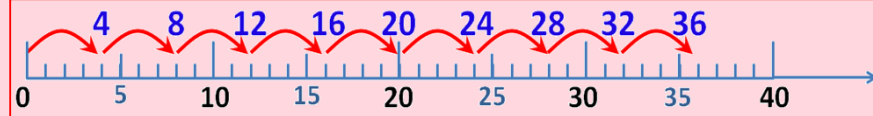
Multiplication of 8



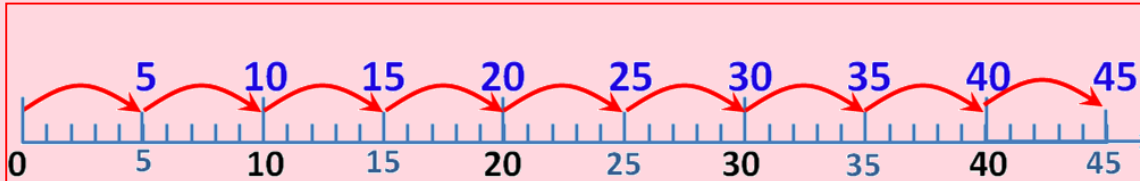
Can you find any multiplication facts to solve the multiplication of 8?



- 1 two 2
- 2 twos 4
- 3 twos 6
- 4 twos 8
- 5 twos 10
- 6 twos 12
- 7 twos 14
- 8 twos 16**
- 9 twos 18



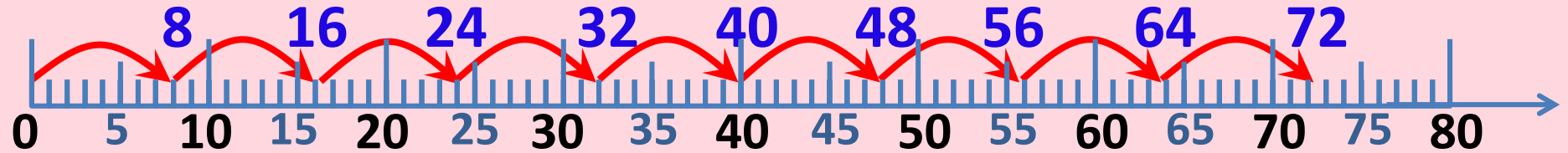
- 1 four 4
- 2 fours 8
- 3 fours 12
- 4 fours 16
- 5 fours 20
- 6 fours 24
- 7 fours 28
- 8 fours 32**
- 9 fours 36



- 1 five 5
- 2 fives 10
- 3 fives 15
- 4 fives 20
- 5 fives 25
- 6 fives 30
- 7 fives 35
- 8 fives 40**
- 9 fives 45



Finish the number line of 8 Times Table.



1 eight 8

6 eights 48

2 eights 16

7 eights 56

3 eights 24

8 eights 64

4 eights 32

9 eights 72

5 eights 40

Write 2 multiplication sentences for each multiplication fact.

9 eights 72

$$9 \times 8 = 72$$

$$8 \times 9 = 72$$

5 eights (40)

$$5 \times 8 = 40$$

$$8 \times 5 = 40$$

(6) eights 48

$$6 \times 8 = 48$$

$$8 \times 6 = 48$$

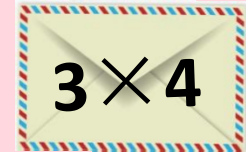

(8) eights (64)

$$8 \times 8 = 64$$



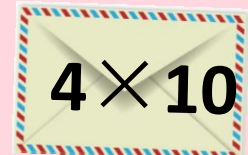


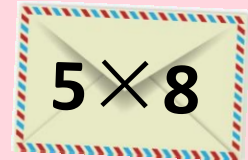



Send the letter to the right mailbox.





Send the letter to the right mailbox.




Challenge

**John walked from the first tree to the ninth tree.
How many metres did he walk?**



There are 8 metres between every two neighbouring trees.



8 eights

$$8 \times 8 = 64$$

trees

The gap



2

1



3

2



4

3



5

4

The number of trees is 1 greater than the gap.

What have you learnt
today?

Thanks!

